



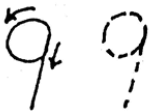
b'eluv'al



9

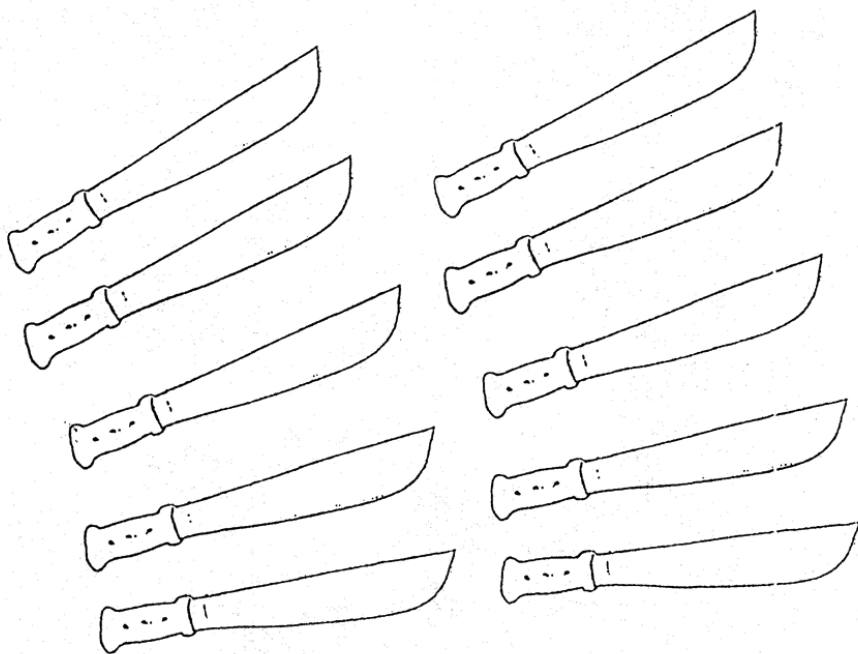



b'eluv'al xu'k

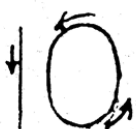


laval

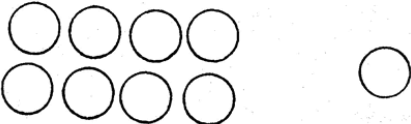
10

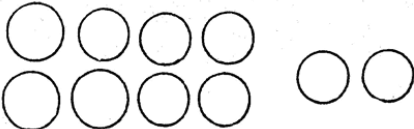


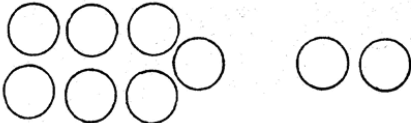
laval ch'ich'

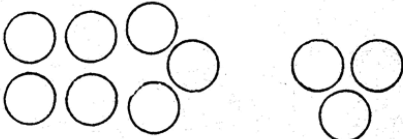



La ik'ul tib' unq'a ache' uva'.

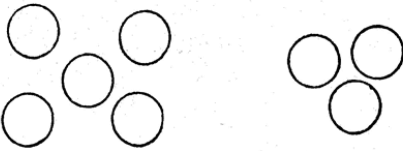
$$8 + 1 = \underline{\quad}$$


$$8 + 2 = \underline{\quad}$$


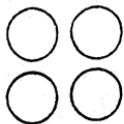
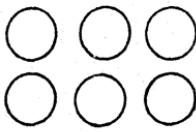
$$7 + 2 = \underline{\quad}$$



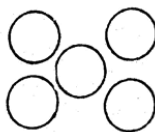
$$7 + 3 = \underline{\quad}$$


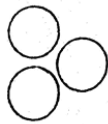
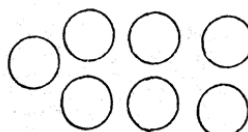
$$6 + 4 = \underline{\quad}$$


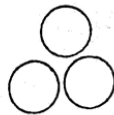

$$5 + 3 = \underline{\quad}$$


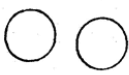
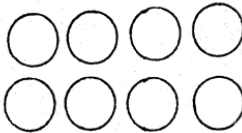
La ik'ul tib' unq'a ache' uva'.


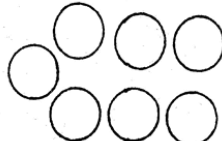
$$4 + 6 = \underline{\quad}$$



$$4 + 5 = \underline{\quad}$$



$$3 + 7 = \underline{\quad}$$



$$3 + 6 = \underline{\quad}$$



$$2 + 8 = \underline{\quad}$$



$$2 + 7 = \underline{\quad}$$



Acha as la aq' ku' jaq' uve' jutx'imal b'en.

$$\begin{array}{r} 8 \\ +2 \\ \hline \end{array}$$

$$\begin{array}{r} 7 \\ +3 \\ \hline \end{array}$$

$$\begin{array}{r} 5 \\ +5 \\ \hline \end{array}$$

$$\begin{array}{r} 6 \\ +3 \\ \hline \end{array}$$

$$\begin{array}{r} 4 \\ +4 \\ \hline \end{array}$$

$$\begin{array}{r} 3 \\ +3 \\ \hline \end{array}$$

$$\begin{array}{r} 3 \\ +7 \\ \hline \end{array}$$

$$\begin{array}{r} 3 \\ +5 \\ \hline \end{array}$$

$$\begin{array}{r} 2 \\ +7 \\ \hline \end{array}$$

$$\begin{array}{r} 1 \\ +8 \\ \hline \end{array}$$

$$\begin{array}{r} 4 \\ +5 \\ \hline \end{array}$$

$$\begin{array}{r} 4 \\ +6 \\ \hline \end{array}$$



$$\begin{array}{r} 9 \\ +1 \\ \hline \end{array}$$

$$\begin{array}{r} 7 \\ +2 \\ \hline \end{array}$$

$$\begin{array}{r} 5 \\ +4 \\ \hline \end{array}$$


$$\begin{array}{r} 3 \\ +7 \\ \hline \end{array}$$

11 junlaval




$$10 + 1 = 11$$

12 kab'laval





$$10 + 2 = 12$$

13 oxlaval




$$10 + 3 = 13$$

14 kaalaval




$$10 + 4 = 14$$

15 o'laval




$$10 + 5 = 15$$

16 vajlaval



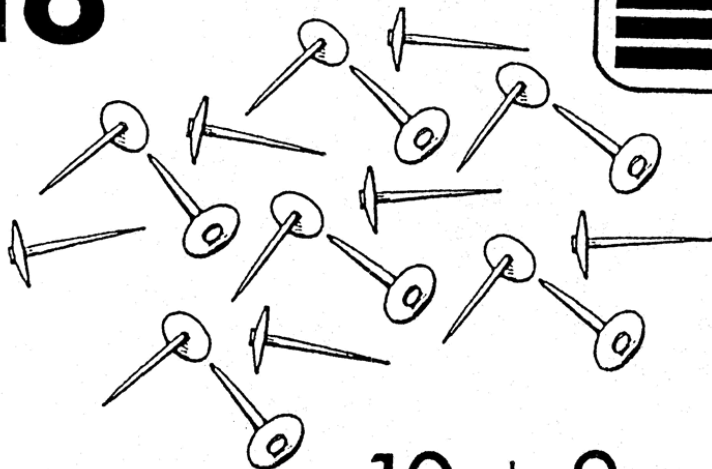
$$10 + 6 = 16$$

17 vujlaval




$$10 + 7 = 17$$

18 vaaxajlaval





$$10 + 8 = 18$$

19 b'elelaval



$$10 + 9 = 19$$

20 viinqil



$$10 + 10 = 20$$

Unq'a ach uva' ni xe't tu
uma'l as ni tzojpu tu viinqil

- | | |
|---|---|
| 1. <input type="checkbox"/> . uma'l | 11. <input type="checkbox"/> ≡ junlaval |
| 2. <input type="checkbox"/> .. ka'va'l | 12. <input type="checkbox"/> ≡.. kab'laval |
| 3. <input type="checkbox"/> ... oxva'l | 13. <input type="checkbox"/> ≡... oxlaval |
| 4. <input type="checkbox"/> kajva'l | 14. <input type="checkbox"/> ≡.... kaalaval |
| 5. <input type="checkbox"/> — o'va'l | 15. <input type="checkbox"/> ≡≡ o'laval |
| 6. <input type="checkbox"/> . vaajil | 16. <input type="checkbox"/> ≡. vajlaval |
| 7. <input type="checkbox"/> .. vujva'l | 17. <input type="checkbox"/> ≡.. vujlaval |
| 8. <input type="checkbox"/> ... vaaxil | 18. <input type="checkbox"/> ≡... vaaxalaval |
| 9. <input type="checkbox"/> b'eluval | 19. <input type="checkbox"/> ≡.... b'elelaval |
| 10. <input type="checkbox"/> ≡ laval | 20. <input type="checkbox"/> . viinqil |

11



12



13



14

15

16



17

18



19

20